



बसंत वैली पब्लिक स्कूल
पुनरावृत्ति अभ्यास कार्य 2017-18
विषय – हिन्दी

कक्षा – चार

प्र 1. संज्ञा शब्द पर गोला लगाइए।

1. मेरे घर के पास एक सुंदर बाग है।
2. आकाश में सूरज चमक रहा है।
3. राजू का भाई बहुत बीमार है।
4. काका ने ओमू को दस रूपए दिए।

प्र 2. वचन बदलो।

1. पुस्तक —
2. टोपी —
3. आँख —
4. चाबी —
5. नदी —

प्र 3. लिंग बदलो।

1. नेत्र —
2. गाय —
3. विधवा —
4. पाठक —
5. सेवक —

प्र 4. कारक बताइए।

1. राम ने रावण को मारा।

2. सुप्रिया कमरें में है।
3. मैंने निर्धनों को वस्त्र बाँटे।
4. रोहन छत पर गिर पड़ा।
5. माता ने पुत्र को बुलाया।

प्र 5. विलोम शब्द लिखो।

1. कोमल —
2. वीर —
3. पाप —
4. उचित —
5. जय —

प्र 6. पर्यायवाची शब्द लिखो।

1. शरीर —
2. नदी —
3. घर —
4. संसार —

प्र 7. 'एकता में बल है' विषय पर कहनी लिखो।

.....

.....

.....

.....

.....

.....

.....

.....

.....
.....
.....
जूही

प्र 1. निम्न प्रश्नों के उत्तर लिखो।

1. मोर क्या चाहता था ?

उ०.
.....

2. जादुई घड़ा कैसे फूटा ?

उ०.
.....

3. आदमी ने आग कैसे पैदा की ?

उ०.
.....



BASANT VALLEY PUBLIC SCHOOL
REVISION WORKSHEET (2017-18)
SUBJECT - SCIENCE

CLASS - 4th

Q.1. Fill in the blanks:

1. _____ foods contain a lot of sugar, salt or fat.
2. The body needs _____ to transport oxygen from the lungs to the rest of the body.
3. Number of milk teeth a child has are _____
4. Another name for the food pipe is _____
5. _____ is the ability to blend into the surrounding environment.

Q.2. Match the column:

(A)

Natural home of an animal

Vitamin C

Prehensile tail

Vitamin A, D, E & K

Water

(B)

Lemon

Habitat

Help in digestion

Spider monkey

fat soluble vitamin

Q.3. Make the statement correct -

1. Carbohydrate are also known body building food.

2. Many aquatic animals have long limbs that allow them to swing efficiently from branch to branch.

3. Swallowing is the first process in digestion.

4. Chicken pox is caused by protozoa.

Q.4. Very short answer type questions:

1. Write two source of refinery fibre.

2. What are give nutrients our body needs?

3. Give any one method of food persecution.

4. Why do bird migrate?

Q.4. Short answer type question:

1. What makes a balance diet?

2. Why should we do not have junk food. Too often

3. What are tooth enamel & dentin?

Q.5. Long answer type questions:

1. How we look after our teeth.

2. What are some adaptive features of a camel?



BASANT VALLEY PUBLIC SCHOOL
REVISION WORKSHEET (2017-18)
SUBJECT – English

CLASS – 4th

Section - A, Reading

Q.1. Read the conversation carefully and answer the questions that follow -

(Students of class four were taken to the zoo. The keeper, Mr. Kumar took them around guiding them with good advice, all the way.)

Mr. Kumar - The monkeys are a friendly lot. You may feed them but you must not put your hands inside the cage.

Manav - Mr. Kumar, may I take a few photos of the animals?

Mr. Kumar -Yes, you must, you may take my help with the close-up photos.

Rakesh - May I shake hands with the baby monkey? I did it last year.

Mr. Kumar -No, you must not fry these pranks. You may not be lucky every time. Just enjoy and collect useful information from this visit.

A) What was the keeper's name?

Ans. _____

B) Who wanted to shake hands with the little monkey?

Ans. _____

C) What was Mr. Kumar's advice to the student?

Ans. _____

Section - B, Grammar

Q.2. Choose the correct collective nouns from the box to fill in the blanks -

(a pack of, a regiment of)

1) _____ soldiers were doing their morning exercise.

2) the hunters were chased by _____

B) Replace the underlined words with their plurals -

a) The city on the plains is newly built.

Ans. _____

b) The decayed tooth, was removed by a dentist.

Ans. _____

C) Rewrite the sentences using apostrophies (')

a) The car, parked near the tree belongs to Rani.

Ans. _____

b) These bags belong to the students.

Ans. _____

D) Fill in the blanks with suitable degrees of comparisons, using the adjectives given in the box.

1) Roshni is the _____ (tall) player.

2) Honey is _____ (sweet) than sugar.

E) Fill in the blanks with 'a', 'an' or 'the' -

1) _____ girl who was crowned, Miss. India is _____ Indian.

2) _____ lady who lives near my house is not only _____ - good dancer but also _____ excellent painter.

F) Replace the underlined words with personal pronouns.

1) The boys broke the window pane, so the boys were punished.

Ans. _____

2) Sona always stands first in class. Sona is an intelligent girl.

Ans. _____

Section - C, Writing

Q.3. Develop a story using the given hints.

_____ Romu and Jeshu were close friend _____ they were going through the forest _____ a big bear was approaching them _____ Romu suddenly climbed on a tree _____ Jeshu did not know to climb a tree _____ got an idea _____ lied down on the ground as if he was dead _____ the bear came closer to him _____ smelled at him _____ after some time he went away _____

Moral -

Q.4. Write a letter to your friend telling about your feelings when your name was announced for the best singer award.

Section - D, Literature

Q.5. Give the meaning of the words given below -

1) vivid - _____

2) annoyed - _____



BASANT VALLEY PUBLIC SCHOOL
REVISION WORKSHEET (2017-18)
SUBJECT – SST

CLASS – 4th

Q.1. Write true/false for the following statements.

- 1) The hot weather season starts from March in South India. ()
- 2) Cattle are used for beef and dairy products. ()
- 3) The quality of Indian cotton is best in the world. ()
- 4) Dogs and cats are a part of livestock. ()
- 5) Rabi crop is sown after the rainy season stops. ()

Q.2. One word answer -

1) **In which season wheat is grown?**

Ans. _____

2) **Which is the main tool to develop human beings?**

Ans. _____

3) **Name a rich manure .**

Ans. _____

4) **Which animal provides wool?**

Ans. _____

5) **In which latitude India lies?**

Ans. _____

6) **In India hot weather season starts from which month?**

Ans. _____

Q.3. Fill in the blanks -

1) _____ carry men & goods in desert lands.

2) Pig is raised for _____.

- 3) Education is very important to _____
- 4) The tropic of cancer passes through the _____ of the country.
- 5) When the sun is over the tropic of cancer the climate in Northern plains is _____
- 6) When the sun is over the tropic of Capricorn the climate in Northern plains is _____
- 7) Every citizen of the country is a _____
- 8) Biogas plant runs on _____

Q.4. Match the following -

- | | |
|-----------|-------------------|
| a) Sheep | 1) Beef |
| b) Horse | 2) Working animal |
| c) Donkey | 3) Wool |
| d) Cattle | 4) Riding |

Q.5. How poor roads and transportation affect the human resources?

Ans. _____

Q.6. What are the major types of farming?

Ans. _____

Q.7. How can a farmer increase his income?

Ans. _____

Q.8. Name the main seasons.

Ans.



BASANT VALLEY PUBLIC SCHOOL
REVISION WORKSHEET (2017-18)
SUBJECT – Maths

CLASS – 4th

Q.1. Complete the addition -

a)
$$\begin{array}{r} 1 \quad 4 \quad 0 \quad 1 \\ + \quad 7 \quad 5 \quad 2 \\ \hline \\ \hline \end{array}$$

b)
$$\begin{array}{r} 2 \quad 1 \quad 4 \quad 9 \quad 6 \quad 2 \\ + \quad 1 \quad 7 \quad 2 \quad 3 \quad 0 \quad 6 \\ \hline \\ \hline \end{array}$$

c)
$$\begin{array}{r} 6 \quad 1 \quad 1 \quad 3 \\ + \quad 9 \quad 4 \quad 1 \\ \hline \\ \hline \end{array}$$

d)
$$\begin{array}{r} 4 \quad 9 \quad 2 \quad 2 \quad 1 \\ + \quad 6 \quad 6 \quad 6 \\ \hline \\ \hline \end{array}$$

Q.2. Write the number which is -

a) 1000 more than 2,15,000

b) 300 more than 72,000

c) 200 more than 2,314

d) 300 more than 26,900

e) 700 more than 30,320

Q.3. Fill in the missing numbers -

a)
$$\begin{array}{r} 8 \quad 2 \quad 7 \quad 5 \quad 4 \\ - \quad \square \quad 1 \quad \square \quad \square \quad 8 \\ \hline \\ \hline \end{array}$$

$$\begin{array}{r} 6 \quad \square \quad 9 \quad 3 \quad 6 \\ \hline \\ \hline \end{array}$$

b)
$$\begin{array}{r} 1 \quad 2 \quad 1 \quad 9 \quad 1 \quad 6 \\ - \quad 6 \quad 2 \quad 2 \quad \square \quad 7 \\ \hline \\ \hline \end{array}$$

$$\begin{array}{r} \square \quad \square \quad \square \quad 0 \quad \square \\ \hline \\ \hline \end{array}$$

Q.3. Find the sum of -

a) 1,54,023 and 4,21,746

b) 5,27,123 and 3,17,298

Q.4. Subtract -

a) 51834 - 20512

b) 99999 - 23458

Q.5. Mr. Roy deposited Rs. 2,01,745 in a bank and Rs. 3,38,745 in another bank. How much money did he deposit in total?

Q.6. A dictionary has 88,728 words. Mohan has read 37,487 words out of these. How many words are left to be read?

Q.7. Draw the line segments of the given lengths.

a) 6.8 cm

b) 5.7 cm

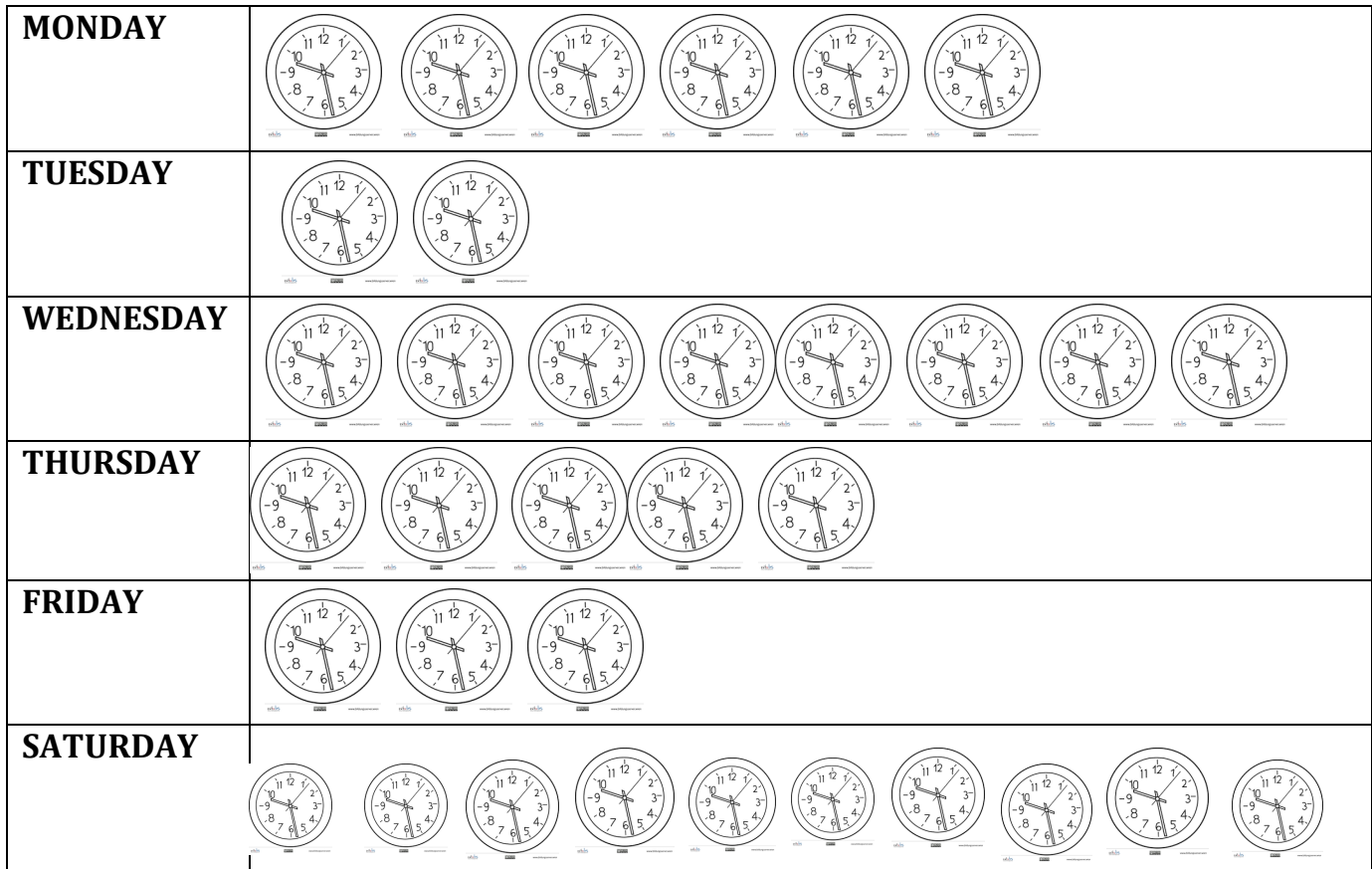
Q.8. Draw a circle whose diameter is


a) diameter = 10 cm

b) diameter = 16 cm

Q.9. The following pictograph shows the number of clock sold by a shop from Monday to Saturday.

Number of clock sold



1  = 2 CLOCK

Read the pictograph and answer the following questions -

a) On which day were the minimum numbers of clocks sold?

Ans. _____

b) How many more clocks were sold on Wednesday than on Tuesday?

Ans. _____


c) How many clocks were sold on Saturday?

Ans. _____

d) How many clocks in all were sold by the shop in 6 days?

Ans. _____

Q.10. The following information is about the different kind of programs that children watch on television these days.

Draw a pictograph to represent the information using 1  = 5 children and answer the questions given.

Programme	Cartoons	Sports	News	Serials	Movies
Number of children	50	45	25	30	40

a) Which kind of programme is most popular?

Ans. _____

b) Which kind of programme is more popular: Sports or Movies?

Ans. _____

c) How many children watch the news?

Ans. _____



BASANT VALLEY PUBLIC SCHOOL
REVISION WORKSHEET (2017-18)
SUBJECT – Computer

CLASS – 4th

Q.1. Write the answers for the following questions

- 1) What do super computer means?
- 2) Write the other name of minicomputer.
- 3) Name the computer designed for a single user with a multitude of various tasks.
- 4) Name the two components of CPU

Q.2. Fill in the blanks

- 1) The system unit is also known as a _____
- 2) CPU is most commonly called _____
- 3) _____ is one of the secondary storage.
- 4) Super computers are mainly used for the _____ stuffs.

Q.3. Tick (✓) the correct answer

- 1) The computers used in banking and insurance business
 - a) Mini
 - b) Mainframe
 - c) Super
- 2) The first successful super computer -
 - a) CDC 6600
 - b) ENIAC
 - c) IBM 360
- 3) The computer that works in terms of digits -
 - a) ECG machine
 - b) Laptop
 - c) Speedometer
- 4) The main circuit board of a micro computer -
 - a) CPU
 - b) Motherboard
 - c) ALU

Q.6. Match the following

- | | |
|----------------|-------------------------------|
| a) Floppy disk | 1) Slots and holes |
| b) ALU | 2) Rectangle shape disk |
| c) Memory Unit | 3) Mathematical calculation |
| d) Ports | 4) Store data and instruction |

Q7. Write the answers for the following questions

- a) What is the use of system Unit?
- b) Explain the function of control unit and ALU.
- c) Differentiate between - 1)Primary and Secondary
2)Super and Micro