

BASANT VALLEY PUBLIC SCHOOL



WORKSHEET - EVS

WINTER BREAK

CLASS – 1ST

Q.1. Tick the correct answer –

- 1) We can travel in the sky by –
 - a) train ()
 - b) aeroplane ()
 - c) Car ()
- 2) The vehicle that moves on the sea is –
 - a) aeroplane ()
 - b) auto rickshaw ()
 - c) ship ()
- 3) The vehicle mostly used in villages is a –
 - a) bullocart ()
 - b) train ()
 - c) helicopter ()
- 4) Which of the following animal is used to pull vehicle?
 - a) cat ()
 - b) horse ()
 - c) dog ()
- 5) A blue part on the globe shows
 - a) land ()
 - b) mountain ()
 - c) water ()
- 6) The high part of land is called –
 - a) hill ()
 - b) plain ()
 - c) ocean ()
- 7) The shape of our earth is –
 - a) round ()
 - b) rectangle ()
 - c) square ()

8) Flat land is called –

a) mountain ()

b) hill ()

c) plain ()

9) you can see dark clouds on a

a) rainy day ()

b) night ()

c) holiday ()

10) I give heat & light to the earth. I am the

a) moon ()

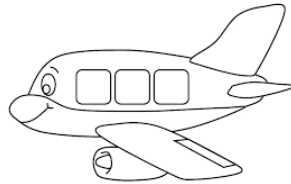
b) rainbow ()


c) sun ()

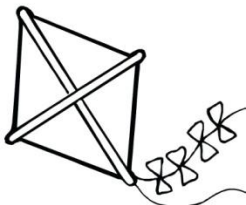
Q.2. Name these pictures using help box.

(aeroplane, clouds, sun, moon, helicopter, star, bird, kite)





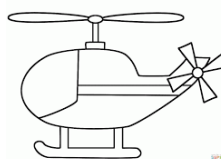












Q.3. Tick (✓) the correct statement and (✗) the wrong one.

- 1) Plant move trees. ()
- 2) Use plastic bags. ()
- 3) Throw garbage on the road. ()
- 4) Try to make less use of cars. ()
- 5) Ship sails on the land. ()
- 6) Train runs on tracks laid on the ground. ()
- 7) A helicopter is a slow moving vehicle. ()
- 8) We travel in the sky by aeroplane. ()

Q.4. Answer the following questions –

1) What is a globe?

2) Name two means of water transport?

3) Name the two parts of Earth?

4) What do you mean by hill?

BASANT VALLEY PUBLIC SCHOOL



WORKSHEET – (1) MATHS

WINTER BREAK

CLASS – 1ST

Q.1. Fill in the blanks –

- a) There are _____ days in a week.
- b) There are _____ months in a year.
- c) Sunday is the _____ day of the week.
- d) Friday comes before _____
- e) Wednesday is the _____ day of the week.
- f) Fifth day of the week is _____

Q.2. Multiply the following –

$$\begin{array}{r} 1 \\ \times 2 \\ \hline \\ \hline \end{array}$$

$$\begin{array}{r} 5 \\ \times 2 \\ \hline \\ \hline \end{array}$$

$$\begin{array}{r} 2 \\ \times 3 \\ \hline \\ \hline \end{array}$$

$$\begin{array}{r} 5 \\ \times 5 \\ \hline \\ \hline \end{array}$$

$$\begin{array}{r} 2 \\ \times 4 \\ \hline \\ \hline \end{array}$$

$$\begin{array}{r} 10 \\ \times 5 \\ \hline \\ \hline \end{array}$$

$$\begin{array}{r} 2 \\ \times 5 \\ \hline \\ \hline \end{array}$$

$$\begin{array}{r} 3 \\ \times 4 \\ \hline \\ \hline \end{array}$$

$$\begin{array}{r} 10 \\ \times 3 \\ \hline \\ \hline \end{array}$$

$$\begin{array}{r} 1 \\ \times 4 \\ \hline \\ \hline \end{array}$$

$$\begin{array}{r} 3 \\ \times 3 \\ \hline \\ \hline \end{array}$$

$$\begin{array}{r} 3 \\ \times 5 \\ \hline \\ \hline \end{array}$$

2

X 2

6

X 2

10

X 4

1

X 5

9

X 2

8

X 3

4

X 6

4

X 4

Q.3. Answer the following –

- a) Which is the first month of the year? _____
- b) Which month comes before March? _____
- c) Which is the last month of the year? _____
- d) Which month comes after May? _____
- e) A clock has _____ hands.
- f) Which is the eighth month of the year? _____
- g) Which month comes between July and September? _____
- h) The clock tells us the _____.

Q.4. Learn and write the tables 2 to 5. (5 times in notebook)

BASANT VALLEY PUBLIC SCHOOL

WORKSHEET – (2) MATHS

WINTER BREAK



CLASS – 1ST

Money

Q.1. Which coin has the least value?



Q.2. Which coin has the highest value?




Q.3. which is the 5 rupees coin?




Time

What time is it?




It is 7 O' clock

What time is it?



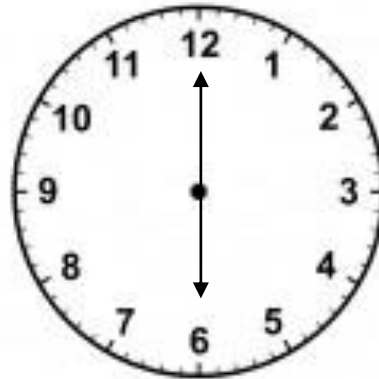
It is O' clock

What time is it?




It is O' clock

What time is it?



It is O' clock

What time is it?



It is O' clock



BASANT VALLEY PUBLIC SCHOOL

WORKSHEET - HINDI

WINTER BREAK

CLASS – 1ST

प्र 1. निम्नलिखित अक्षरों को मिलाकर लिखो।

1. म + क + ड + ी =

2. प + प + ी + त + ा =

3. म + ु + क + ु + ट =

4. ख + ज + ू + र =

5. न + र + े + श =

6. म + े + ल + ा =

7. म + े + न + ा =

8. स + म + ो + स + ा =

9. प + क + ौ + ड + ा =

10. सा + ू + प =

प्र 2. दिए गए वाक्यों में सही व गलत बताइए।

1. करन को खेलने के लिए जाना था।

()

2. नाव फूलों से बनी हुई थी।

()

3. नेहरू जी पुस्तकालय में गए।

()

4. हमें दिन में एक बार ब्रश करनी चाहिए। ()

प्र 3. निम्नलिखित शब्दों के अर्थ लिखो।

1. दोस्त

2. जल

3. नैया

4. बीमार

प्र 4. निम्नलिखित प्रश्नों के उत्तर में सही व गलत का निशान लगाओ।

1. बिना हाथ धोए खाने से हमारे पेट में क्या चले जाते हैं ?

क. कीटाणु

ख. खाना

2. नाव किस पर झूला करती है ?

क. झूले पर

ख. लहरों पर

ग. पेड़ पर

3. नेहरू जी को क्या पढ़ने का शौक था ?

क. कागज

ख. किताबें

ग. पत्र

4. नाव किसका बोझा भरती है ?

क. कागज का

ख. फूलों का

प्र 5. निम्न प्रश्नों के उत्तर दीजिए।

1. नेहरू जी किताबों को कैसे रखते थे ?

2. नाव को किसकी परवाह नहीं है ?

3. नाखून बढ़ जाने पर क्या करना चाहिए ?

BASANT VALLEY PUBLIC SCHOOL



WORKSHEET (2) - HINDI

WINTER BREAK

CLASS – 1ST

प्र 1. अपने कमरों में रखी पाँच चीजों की सूची बनाओ।

1.	<input type="text"/>
	<input type="text"/>
	<input type="text"/>
3.	<input type="text"/>
	<input type="text"/>
	<input type="text"/>
5.	<input type="text"/>
	<input type="text"/>
	<input type="text"/>

2.	<input type="text"/>
	<input type="text"/>
	<input type="text"/>
4.	<input type="text"/>
	<input type="text"/>
	<input type="text"/>

प्र 2. एक व अनेक करें।

1.	रानी	<input type="text"/>
		<input type="text"/>
		<input type="text"/>
3.	नाली	<input type="text"/>
		<input type="text"/>
		<input type="text"/>

ताला	<input type="text"/>
	<input type="text"/>
	<input type="text"/>
लड़का	<input type="text"/>
	<input type="text"/>
	<input type="text"/>

प्र 3. पुल्लिंग व स्त्रीलिंग करे।

1.	दादा	<input type="text"/>
		<input type="text"/>
		<input type="text"/>
3.	शेर	<input type="text"/>
		<input type="text"/>
		<input type="text"/>

2.	बकरा	<input type="text"/>
		<input type="text"/>
		<input type="text"/>
4.	नौकर	<input type="text"/>
		<input type="text"/>
		<input type="text"/>

प्र 4. उचित मिलान करे।

पत्ता

बात

पेंसिलें

पत्ते

तारा

पेंसिल

बातें

तारे

प्र 5. 'चतुर खरगोश' नामक कहानी पर पाँच से सात वाक्य लिखो।

BASANT VALLEY PUBLIC SCHOOL



WORKSHEET - ENGLISH

WINTER BREAK

CLASS – 1ST

Q.1. Fill in the missing letters –

- 1) Pict_____ e
- 2) Chi_____ren
- 3) Su_____er
- 4) Sprin_____le
- 5) Pre_____es

Q.2. Make sentences of your own.

- a) Put –

- b) Help –

Q.3. Fill in the blanks –

- 1) Mamma sprinkles some

 and

 on the slice of bread.
- 2) One day Rohit picks

 ripe red tomatoes.
- 3) The mango tree is in

 garden.
- 4) Kuldeeps's friends plays

 and

 with her.

Q.4. State whether true or false –

- 1) Kuldeep even eats her lunch under it. ()
- 2) Rohit's teacher gives him a brinjal plant. ()
- 3) Rohit's mom puts banana and a bottle of water into the bag. ()

Worksheet – 2 – Grammar

Q.1. Rewrite the following sentences with capital letters and full stops wherever is necessary.

- 1) my name is nita

- 2) i live in Gurgaon

- 3) sunday is a holiday

Q.2. Fill in the blanks with 'a' or 'an'.

- 1)

 elephant and

 monkey are friends.
- 2)

 apple a day is good for health.
- 3) We saw

 ostrich in the zoo.

Q.3. Fill in the blanks with 'He', 'She' or 'It'.

- 1) Sheena is a girl. _____ is my friend.
- 2) Jimmy is a dog. _____ is my pet dog.
- 3) My school bag is big. _____ is pink in colour.
- 4) Ravi is a doctor. _____ treats patients.